

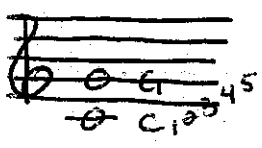
Circle of Fifths
FLAT KEYS

Name: _____

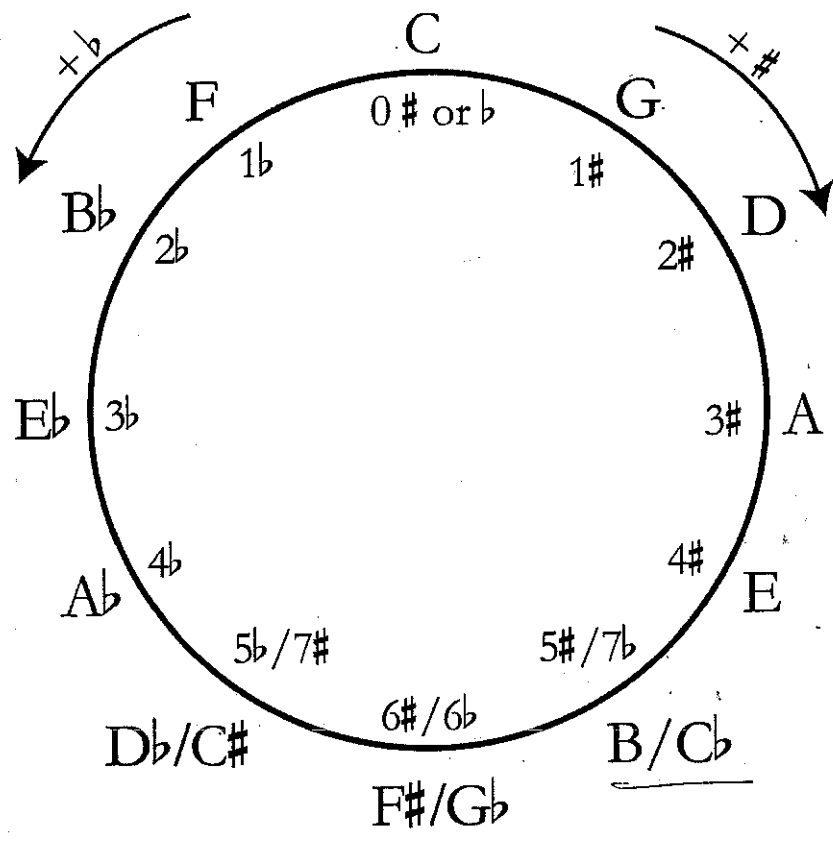
This the Circle of Fifths.

If you read it clockwise, each letter is a 5th above the previous letter.

Example:




C to G is a 5th



Using the circle of fifths as a guide, fill in the key sigs below.


- Write down the order of sharps: _____
- Write down the order of flats: _____



3. Key of Cb

4. Key of Gb

5. Key of Db




6. Key of Ab

7. Key of Eb

8. Key of Bb

10. What key signatures LOOK DIFFERENT but would sound the same if played?

Enhancements!



9. Key of F

