

1. The order of sharps is \_\_\_\_\_

2. The order of flats is \_\_\_\_\_


Fill in the key signatures for the given key below. Watch placement!


3.  C


4.  F


5.  B<sup>b</sup>

6.  E<sup>b</sup>

7.  A<sup>b</sup>

8.  D<sup>b</sup>

9.  G<sup>b</sup>


10.  C<sup>b</sup>


11.  G

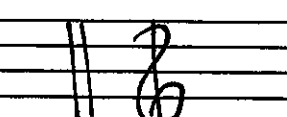
12.  D

13.  A

14.  E



15.  B



16.  F<sup>#</sup>

17.  C<sup>#</sup>

Define the following symbols:

18.  1.  2.

19.  

20.  and 

\_\_\_\_\_

\_\_\_\_\_

\_\_\_\_\_

\_\_\_\_\_

\_\_\_\_\_

\_\_\_\_\_